

ESCOLA: _____

NOME: _____

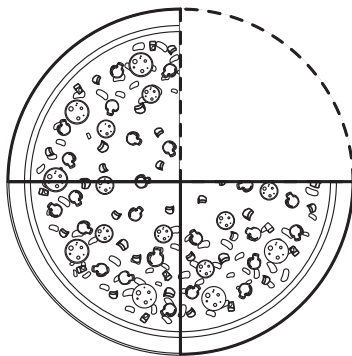
PROFESSOR: _____ DATA: ____/____/____



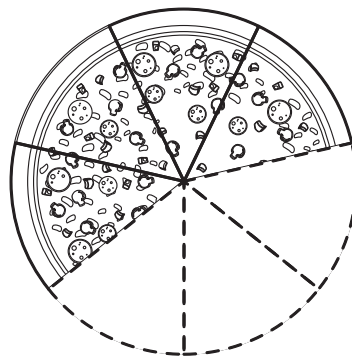
FRAÇÕES



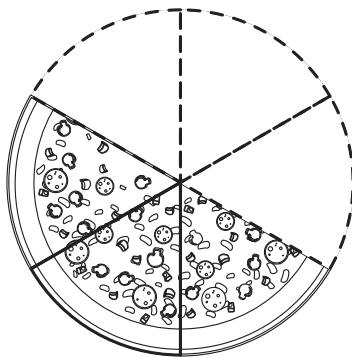
1 – Represente as frações.



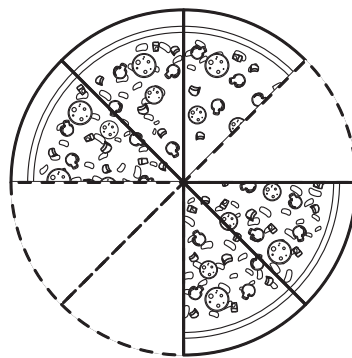
$\frac{3}{4}$



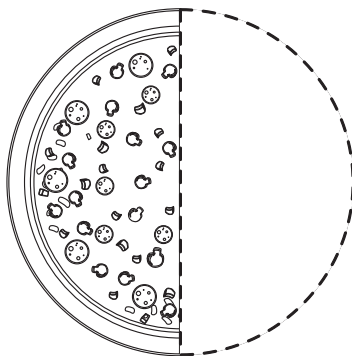
$\frac{4}{7}$



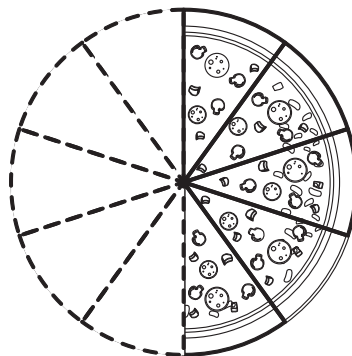
$\frac{3}{6}$



$\frac{5}{8}$



$\frac{1}{6}$



$\frac{5}{10}$

ESCOLA: _____

NOME: _____

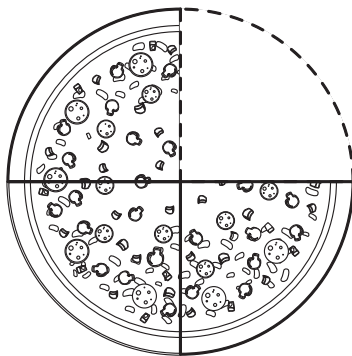
PROFESSOR: _____ DATA: ___/___/___



FRAÇÕES



1 – Represente as frações.



$\frac{3}{4}$

